



Kids Learn!

Getting Ready for

1st Grade

Assessments

Author

Jodene Smith, M.A.

Publishing Credits

Conni Medina, M.A.Ed., *Managing Editor*; Robin Erickson, *Production Director*;
Lee Aucoin, *Creative Director*; Timothy J. Bradley, *Illustration Manager*;
Aubrie Nielsen, M.S.Ed., *Senior Editor*; Marissa Rodriguez, *Designer*;
Rachelle Cracchiolo, M.S.Ed., *Publisher*

Image Credits

All images shutterstock.

Teacher Created Materials

5301 Oceanus Drive
Huntington Beach, CA 92649-1030
<http://www.tcmpub.com>

ISBN 978-1-4938-0264-7

© 2014 Teacher Created Materials, Inc.

The classroom teacher may reproduce copies of materials in this book for classroom use only. The reproduction of any part for an entire school or school system is strictly prohibited. No part of this publication may be transmitted, stored, or recorded in any form without written permission from the publisher.

Pretest

Directions: Answer the questions below.

1. Say the name for the picture. What letter makes the beginning sound?



(A) j

(C) m

(B) g

(D) u

-
2. What is the vowel in the word  ?

(A) a

(C) o

(B) e


(D) u

-
3. Which word rhymes with  ?

(A)



(C)



(B)



(D)



Name: _____

Date: _____

Pretest (cont.)

4. Change a letter to make a new word.



fan

5. Which sentence tells about the picture?



- (A) The hat has a rat. (C) The cat has a hat.
(B) The rat has a hat. (D) The cat has a bat.

6. Write the sentence correctly.

i am six.

7. Spell the word.



Name: _____ Date: _____

Pretest (cont.)

8. Count by one from the first number. Write each number you count.

8, 9, _____, _____, _____

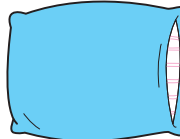
9. Draw a triangle.

10. Which object is lighter than a  ?


(A)



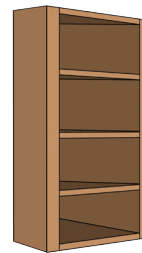
(C)



(B)



(D)



11. Draw a picture to show how to solve $2 + 3 = 5$.

Name: _____

Date: _____

Pretest (cont.)

12. There are 3 apples. Jane eats 1. How many are left?




(A) 3

(C) 1

(B) 2

(D) 0

13. Count the objects. Write the number.



14. Which is more than ●●●●●? Mark all correct answers.

(A) ▲▲▲▲▲▲

(C) ■■■■■

(B) ■■■■■■

(D) ◆◆◆




Name: _____

Date: _____

Posttest

Directions: Answer the questions below.

1. Say the name of the picture. What letter makes the beginning sound?



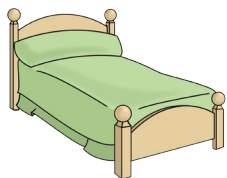
(A) l

(C) h

(B) j

(D) i

-
2. What is the vowel in the word?



(A) a

(C) o

(B) e

(D) u

-
3. Which word or words rhyme with



(A)



(C)



(B)



(D)



Name: _____

Date: _____

Posttest (cont.)

4. Change a letter to make a new word.



mop

5. Which sentence tells about the picture?



- A The mop has a dog. C The dog has a mug.
 B The dog has a mop. D The pig has a nut.

6. Write the sentence correctly.

i can run.

7. Spell the word.



Name: _____ Date: _____

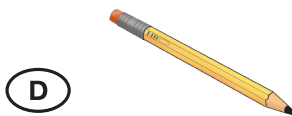


Posttest (cont.)

8. Count by one from the first number. Write each number you count.

11, 12, _____, _____, _____

9. Draw a rectangle.

10. What is heavier than a  ?



11. Draw a picture to show how to solve $4 + 2 = 6$.

Name: _____

Date: _____

Posttest (cont.)

12. There are 5 nuts. I eat 2. How many are left?



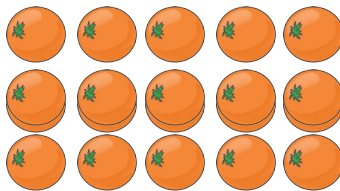
(A) 2

(C) 3

(B) 5

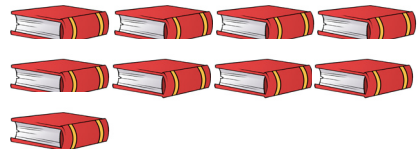
(D) 7

13. Count the objects. Write the number.

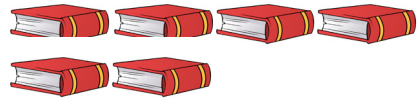


14. Which is less than ? Mark all correct answers.

(A) 

(C) 

(B) 

(D) 



Answer Key

Pretest

1. B
2. D
3. B
4. Answers will vary.
Possible answers include:
fun, fin, fat, can, man,
tan
5. B
6. I am six.
7. pot
8. 10, 11, 12
9. Drawings will vary, but
should show a triangle.
10. C
11. Answers will vary.
12. B
13. 12
14. A and B

Posttest

1. C
2. B
3. C and D
4. Answers will vary.
Possible answers include:
map, cop, top, mom, mow
5. B
6. I can run.
7. pin
8. 13, 14, 15
9. Drawings will vary, but
should show a rectangle.
10. B and C
11. Answers will vary.
12. C
13. 15
14. A and D